

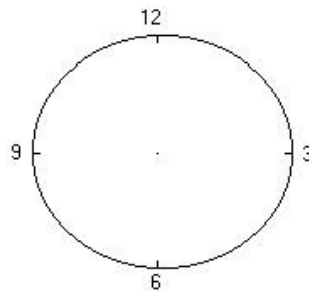
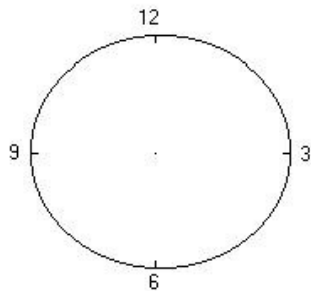
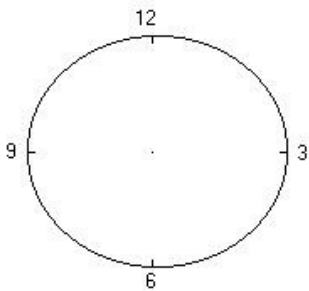
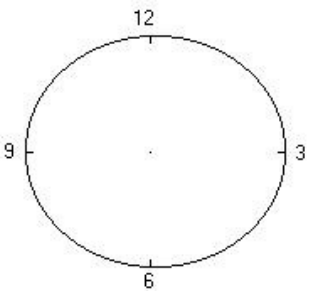
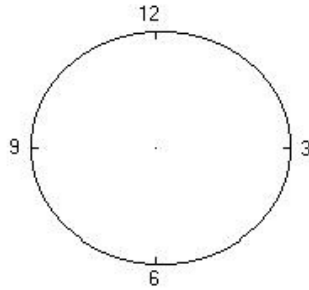
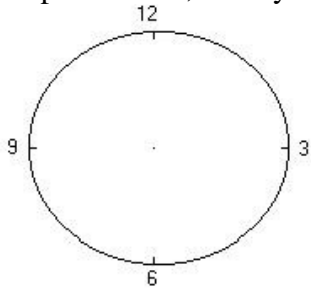
## Die Uhr – the clock

Trage in der linken Spalte folgende Uhrzeiten ein!

nine o'clock, quarter past twelve, quarter to six

Trage in der rechten Spalte folgende Uhrzeiten ein!

half past twelve, twenty to nine, quarter past three



25.

Schreibe folgende Uhrzeiten auf zwei Wegen auf!

Mach es wie im Beispiel.

**Bsp.:** 8.20 = twenty past eight = eight twenty

7.15 = \_\_\_\_\_ = \_\_\_\_\_

6.36 = \_\_\_\_\_ = \_\_\_\_\_

9.01 = \_\_\_\_\_ = \_\_\_\_\_

5.45 = \_\_\_\_\_ = \_\_\_\_\_

3.30 = \_\_\_\_\_ = \_\_\_\_\_

11.10 = \_\_\_\_\_ = \_\_\_\_\_

10.49 = \_\_\_\_\_ = \_\_\_\_\_

6.50 = \_\_\_\_\_ = \_\_\_\_\_